





Monday	Tuesday	Wednesday	Thursday																								
<p>Write 574 in <b>expanded</b> form.</p> <p><b>Word</b> form.</p> <p>_____</p> <p>_____</p>	<p>Count forward by fives. 555, _____, _____, _____</p> <p>Count forward by tens. 475, _____, _____, _____</p> <p>Count forward by hundreds. 270, _____, _____, _____</p>	<p>Draw 302 with base ten blocks in the place value chart.</p> <table border="1" data-bbox="824 289 1166 426"> <thead> <tr> <th>Hundreds</th> <th>Tens</th> <th>Ones</th> </tr> </thead> <tbody> <tr> <td style="height: 50px;"></td> <td style="height: 50px;"></td> <td style="height: 50px;"></td> </tr> </tbody> </table>	Hundreds	Tens	Ones				<p>How many tens are there in 910?</p> <p>309 is the same as __ones __tens __hundreds</p>																		
Hundreds	Tens	Ones																									
<p>Each day Emma makes paper origami for her friends. On the first day she made 9, the second day she made 12, and the third day she made 7. How many did she make altogether?</p>	<p>A pizza delivery man delivered 25 pizzas at lunch time and 38 pizzas at dinner time. How many pizzas did he deliver altogether?</p>	<p>On Monday, a shoe store sold 25 pairs of shoes. On Tuesday they sold 17 pairs of shoes. On Wednesday 8 pairs of shoes were returned to the store. How many pairs of shoes did the shoe store sell without being returned?</p>	<p>Emma put 38 toys into a basket. Her sister took 15 of those toys out of the basket. How many toys are still in the basket?</p>																								
<p>Write the time using AM or PM.</p>  <div style="border: 1px solid black; width: 100px; height: 30px; display: flex; align-items: center; justify-content: center; margin-top: 10px;"> <span style="font-size: 24px; margin-right: 5px;">:</span> <span style="border: 1px solid black; width: 20px; height: 20px; display: inline-block;"></span> <span style="margin-left: 5px;">AM PM</span> </div> <p>Eating Dinner.</p>	<p>Compare the numbers using &gt; &lt; =</p> <p>423 <span style="font-size: 2em; vertical-align: middle;">○</span> 243</p>	<p>Show 3:55 on the clock below.</p> 	<p>Compare the numbers using &gt; &lt; =</p> <p>245 <span style="font-size: 2em; vertical-align: middle;">○</span> 238</p>																								
<p>Brian is measuring string he is going to use to go fishing. So far his string is 3 feet. He adds on 5 more feet. How long is his fishing string now?</p>	<p>The height of a box of cereal is about _____ inches. (circle)</p> <p>3in    7in    15in    27in</p> 	<p>Karen's paper is 12 inches long. She cuts off 4 inches. How long is her paper now?</p>	<p>What is the difference in length of the two rectangles?</p> <p>_____ Inches</p> 																								
<p>Solve. 18 + 54 + 38 + 56</p>	<p>Solve. 87 + 12 + 31 + 44</p>	<p>Solve. 43 + 27 + 88 + 16</p>	<p>Solve. 29 + 43 + 53 + 62</p>																								
<p>Show one way you can make 87 cents using quarters, dimes, nickels, and pennies.</p>	<p>If you have 3 dollar bills, 1 quarter, 2 dimes, 3 nickels, and 4 pennies, how much money do you have?</p>	<p>Mark went shopping and spent 4 dollar bills, 4 dimes, and 6 pennies. How much did he spend?</p>	<p>Jake paid for a pencil with 3 dimes, 1 nickel, and 4 pennies. How much was the pencil?</p>																								
<p>What is 10 more than 157?</p>	<p>What is 10 less than 283?</p>	<p>What is 100 more than 548?</p>	<p>What is 100 less than 721?</p>																								
<p>Find the sum of 235 + 312.</p> <table border="1" data-bbox="97 1848 430 2005"> <thead> <tr> <th>#</th> <th>Hundreds</th> <th>Tens</th> <th>Ones</th> </tr> </thead> <tbody> <tr> <td>235</td> <td></td> <td></td> <td></td> </tr> <tr> <td>312</td> <td></td> <td></td> <td></td> </tr> </tbody> </table>	#	Hundreds	Tens	Ones	235				312				<p>Find the difference of 344-123.</p> <table border="1" data-bbox="462 1848 795 2005"> <thead> <tr> <th>#</th> <th>Hundreds</th> <th>Tens</th> <th>Ones</th> </tr> </thead> <tbody> <tr> <td>344</td> <td></td> <td></td> <td></td> </tr> <tr> <td>123</td> <td></td> <td></td> <td></td> </tr> </tbody> </table>	#	Hundreds	Tens	Ones	344				123				<p>Find the sum of 157 + 238.</p>	<p>Find the difference of 354 - 236.</p>
#	Hundreds	Tens	Ones																								
235																											
312																											
#	Hundreds	Tens	Ones																								
344																											
123																											