

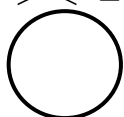
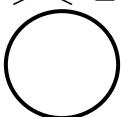











Name: \_\_\_\_\_

Weekly Math Review - Q3:3

Date: \_\_\_\_\_

Monday	Tuesday	Wednesday	Thursday
<p>How many tens are there in 120?</p>	<p>208 is the same as            _____ ones            _____ tens            _____ hundreds</p>	<p>Write the number.              3 ones            12 tens            5 hundreds</p>	<p>What is the largest number you can make with 1, 0, and 3?</p>
<p>Count forward by fives.            18, _____, _____, _____</p>	<p>Count forward by tens.            22, _____, _____, _____</p>	<p>Count forward by hundreds.            131, _____, _____, _____</p>	<p>Count forward by fives.            321, _____, _____, _____</p>
<p>Write the number in <b>standard</b> form.              600 + 10 + 3</p>	<p>Write the number 874 in <b>word</b> form.            _____            _____</p>	<p>Write three hundred sixty-four in <b>standard</b> form.</p>	<p>Write 207 in <b>expanded</b> form.</p>
<p>Compare the numbers using &gt; &lt; =            311  131</p>	<p>Order the numbers from greatest to least.            554    455    545</p>	<p>Compare the numbers using &gt; &lt; =            539  589</p>	<p>Order the numbers from least to greatest.            209    902    292</p>
<p>Solve.            8 + 10 = _____    13 - 11 = _____            12 - 9 = _____    12 + 9 = _____            11 + 7 = _____    15 - 3 = _____</p>	<p>Solve.            2 + 8 = _____    3 + 9 = _____            9 + 9 = _____    5 + 4 = _____            5 + 6 = _____    7 + 8 = _____</p>	<p>Solve.            17 + 8 = _____    10 - 8 = _____            11 - 6 = _____    19 + 4 = _____            6 + 15 = _____    19 - 6 = _____</p>	<p>Solve.            5 + 8 = _____    5 + 2 = _____            2 + 6 = _____    6 + 8 = _____            8 + 6 = _____    7 + 3 = _____</p>
<p>Use a strategy to find the sum of 39 + 46.</p>	<p>Use a strategy to find the difference of 71 - 28.</p>	<p>Use a strategy to find the sum of 47 + 16.</p>	<p>Use a strategy to find the difference of 35 - 28.</p>
<p>In December, Josh purchased 89 logs to burn in his fireplace. He burned 23 logs in January, and 32 in February. How many logs does he have left over?</p>	<p>There are 23 worms in a mud puddle. After it rained, only 8 worms are left. How many worms were washed away?</p>	<p>Chris started out with 7 red marbles in his collection. He got 18 more for his birthday, and 23 more during the year. How many marbles does Chris now have?</p>	<p>Angela made 23 cards for her friends. She wants to make 19 more cards. How many cards will she make in all?</p>
<p>Write the time using AM or PM.     : _____ AM PM            Eating Breakfast</p>	<p>Write the time using AM or PM.     : _____ AM PM            Doing Homework</p>	<p>Write the time using AM or PM.     : _____ AM PM            Eating Lunch</p>	<p>Write the time using AM or PM.     : _____ AM PM            Eating Dinner</p>
<p>What do these tools measure?  </p>	<p>List three items from your house that you would use a ruler to measure.            _____            _____            _____</p>	<p>List three items from your house that you would use a yardstick to measure.            _____            _____            _____</p>	<p>When would you use a measuring tape to measure an object?            _____            _____            _____</p>