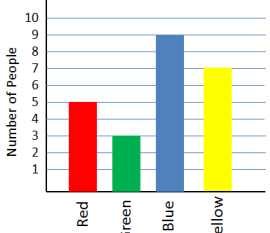
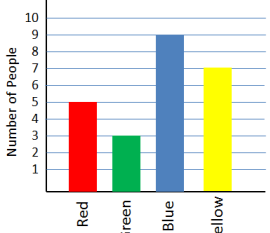
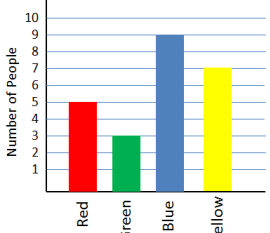
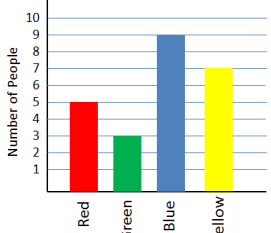


Monday	Tuesday	Wednesday	Thursday						
Find the missing number. $\square + 10 = 11$	Find the missing number. $12 - 11 = \square$	Find the missing number. $14 + 5 = \square$	Find the missing number. $\square - 2 = 17$						
Circle the equation that is TRUE. $13 - 6 = 6$  $12 + 4 = 16$	Find the sum. $7 + 7 + 1 = \square$	Circle the equation that is TRUE. $17 - 8 = 9$  $10 + 3 = 12$	Find the sum. $9 + 9 + 2 = \square$						
Raymond had to count the blocks in the classroom. There were 7 green, 4 yellow, and 5 blue. How many blocks were there altogether?	Marvin has 20 pieces of candy to share with this friends. He gave away 12 pieces. How many does he now have?	The pet store has 8 brown puppies and 9 white puppies. How many puppies do they have in all?	The candy store has 15 lollypops. 12 of them were sold today. How many lollypops are left?						
How many tens are there in 700?	Draw 607 with base ten blocks in the place value chart. <table border="1" data-bbox="456 762 805 926"> <thead> <tr> <th>Hundreds</th> <th>Tens</th> <th>Ones</th> </tr> </thead> <tbody> <tr> <td style="height: 50px;"></td> <td style="height: 50px;"></td> <td style="height: 50px;"></td> </tr> </tbody> </table>	Hundreds	Tens	Ones				Write the number. <div style="border: 1px solid black; width: 100px; height: 30px; margin: 5px 0;"></div> 4 ones 4 tens 2 hundreds	Fill in the blank. 60 tens is the same as _____ hundreds.
Hundreds	Tens	Ones							
Count forward by... Fives 95, _____, _____, _____  Tens 310, _____, _____, _____	Count forward by... Tens 321, _____, _____, _____  Hundreds 410, _____, _____, _____	Count forward by... Fives 185, _____, _____, _____  Tens 370, _____, _____, _____	Count forward by... Fives 550, _____, _____, _____  Hundreds 422, _____, _____, _____						
Write the number in <b>standard</b> form. <div style="border: 1px solid black; width: 100px; height: 30px; margin: 5px 0;"></div> $200 + 40 + 1$	Write the number 206 in <b>word</b> form. _____ _____ _____	Write four hundred sixty-seven in <b>standard</b> form.	Write 792 in <b>expanded</b> form.						
Compare the numbers using > < = 148 <span style="font-size: 2em; vertical-align: middle;">○</span> 143	Compare the numbers using > < = 322 <span style="font-size: 2em; vertical-align: middle;">○</span> 350	Compare the numbers using > < = 873 <span style="font-size: 2em; vertical-align: middle;">○</span> 859	Compare the numbers using > < = 720 <span style="font-size: 2em; vertical-align: middle;">○</span> 740						
Favorite Colors  <p>Number of People</p> <p>What type of graph is shown? How many people are represented in this graph?</p>	Favorite Colors  <p>Number of People</p> <p>Which color did the fewest number of people choose? Which color did the most people choose?</p>	Favorite Colors  <p>Number of People</p> <p>How many more people like blue than green? How many more people like yellow than red?</p>	Favorite Colors  <p>Number of People</p> <p>How many fewer people like green than red? Which color do you like best?</p>						